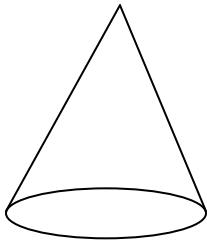
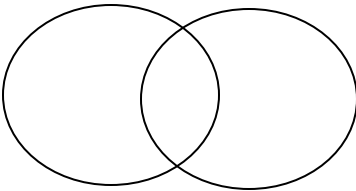
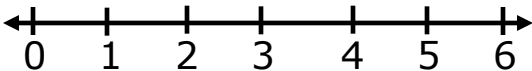


SECTION A

1	<p>Add: 2 3 +1 6</p> <p>_____</p> <p>_____</p>	2	<p>Name the shape below.</p> <div style="text-align: center;"> _____</div>				
3	<p>Shade $\frac{1}{4}$ of the shape below.</p> <div style="text-align: center;"><table border="1" style="margin: auto;"><tr><td style="width: 50px; height: 40px;"></td><td style="width: 50px; height: 40px;"></td></tr><tr><td style="width: 50px; height: 40px;"></td><td style="width: 50px; height: 40px;"></td></tr></table></div>					4	<p>Multiply:</p> <p style="text-align: right;">$6 \times 3 =$</p>
5	<p>Write the tenth month of the year.</p> <p>_____</p>	6	<p>Write 14 in Roman numerals.</p>				
7	<p>Add:</p> $\frac{4}{9} + \frac{1}{9} + \frac{2}{9} =$	8	<p>Shade AUB below</p> <div style="text-align: center;"><p>A B</p></div>				
9	<p>Fill in the missing two numbers.</p> <p>221, _____ 223, _____</p>	10	<p>Draw a set of four flowers.</p> <div style="border: 1px solid black; height: 80px; width: 100%; margin-top: 10px;"></div>				



11	Mark has 50 pens. Tom has 77 pens. How many pens do they have altogether?	12	Find the place value of 9 in 1974.
13	Find the expanded number below. 800 + 40 + 7	14	Use the number line below to add 2 + 3 
15	Given that: M = { 1, 2, 3, 4 } N = { 2, 4, 6 } Find M ∩ N	16	How many heads do 5 boys have?
17	Write 609 in words	18	Add: Sh. 3 0 0 +Sh. 4 5 0 _____



19	<p>Complete the abacus below by drawing beads.</p> <div style="text-align: center;"> <p>H T O</p> <p>2 1 3</p> </div>	20	<p>Find the missing number.</p> <div style="text-align: center;"> <p> + 3 = 12</p> </div>
----	---	----	---

SECTION B

21	<p>a) Write 615 in the expanded form. (2marks)</p>		
b	<p>Find the place value of 6 in 615. (2marks)</p>	c	<p>Write 615 in words. (2marks)</p>
22	<p>Given the Venn diagram below.</p> <div style="text-align: center;"> </div>	a)	<p>Find $P \cap R$ $P \cap R = \{ \dots \}$ (2marks)</p>
		b)	<p>What is $P \cup R$? (2marks) $P \cup R = \{ \dots \}$</p>

c	How many members are in set R ? (2marks)		
23	Work out correctly (2mks)	b)	$ \begin{array}{r} 8 \quad 0 \quad 6 \\ -4 \quad 0 \quad 3 \\ \hline \\ \hline \end{array} $ (2marks)
a)	$ \begin{array}{r} 6 \quad 4 \quad 3 \\ + 2 \quad 3 \quad 5 \\ \hline \\ \hline \end{array} $		
c	$ \begin{array}{r} 3 \quad 0 \quad 2 \\ \times \quad \quad 2 \\ \hline \\ \hline \end{array} $ (2marks)		
24	Use + , X , - or ÷ below. (1mark each) 6 _____ 3 = 2 3 _____ 4 = 12 8 _____ 3 = 5 5 _____ 5 = 10		

25	<p>Match the sets correctly. (1mark each)</p> <div style="display: flex; justify-content: space-around;"> <div style="text-align: center;"> <p><u>B</u></p> <div style="border: 1px solid black; padding: 5px; width: 150px;"> <p>5 + 2</p> <p>8 + 6</p> <p>6 - 4</p> <p>2 x 6</p> </div> </div> <div style="text-align: center;"> <p><u>G</u></p> <div style="border: 1px solid black; padding: 5px; width: 100px;"> <p>2</p> <p>7</p> <p>12</p> <p>14</p> </div> </div> </div>	
26	<p>Name the shapes below. (2marks each)</p> <div style="display: flex; justify-content: space-around; align-items: flex-start;"> <div style="text-align: center;"> <p>a)</p> <div style="border: 1px solid black; width: 300px; height: 150px; position: relative;">  </div> </div> <div style="text-align: center;"> <div style="border: 1px solid black; width: 300px; height: 150px; position: relative;">  </div> </div> </div> <div style="display: flex; justify-content: space-between; margin-top: 10px;"> <div style="width: 45%;"> <p>b)</p> <p>Draw the following shapes. (2marks each)</p> <div style="border: 1px solid black; width: 350px; height: 150px; margin-bottom: 5px;"></div> <div style="border: 1px solid black; width: 350px; height: 150px; margin-bottom: 5px;"></div> <div style="display: flex; justify-content: space-between; margin-top: 5px;"> <div style="width: 45%; border-top: 1px solid black; padding-top: 5px;">rectangle</div> <div style="width: 45%; border-top: 1px solid black; padding-top: 5px;">triangle</div> </div> </div> </div>	

27	Sarah weighs 27 kg. Jane weighs 20kg. a) Who is heavier? (1mark)		
b	Who is lighter ? (2marks)	c	Find their total weight.(2mks)
28	Use >, < or = below. (1mark each) $2 \times 2 \quad \underline{\quad} \quad 4$ $990 \quad \underline{\quad} \quad 909$ <div style="display: flex; align-items: center; justify-content: center;"> <div style="border: 1px solid black; padding: 10px; margin-right: 20px;">  </div> <div style="margin-right: 20px;">_____</div> <div style="border: 1px solid black; padding: 10px;">  </div> </div>		
29	Work out the following correctly. (2marks) a) $\frac{8}{11} - \frac{4}{11}$		
b	$\frac{3}{17} + \frac{3}{17} + \frac{4}{17}$	c	Write "two tenths" In figures. (1mark)

30

Complete the table by filling in the missing numbers. (1mark @

43	44	45	46
_____	48	49	50
51	_____	53	_____
55	56	56	58

31

Study the price list and answer the questions that follow.

Item	Price
Pencil	Sh. 200
Pen	Sh. 500
Book	Sh. 1000
sweet	Sh. 100

a)

How many items are on the price list?

(1mark)

b)

Find the cost of 2 pens.

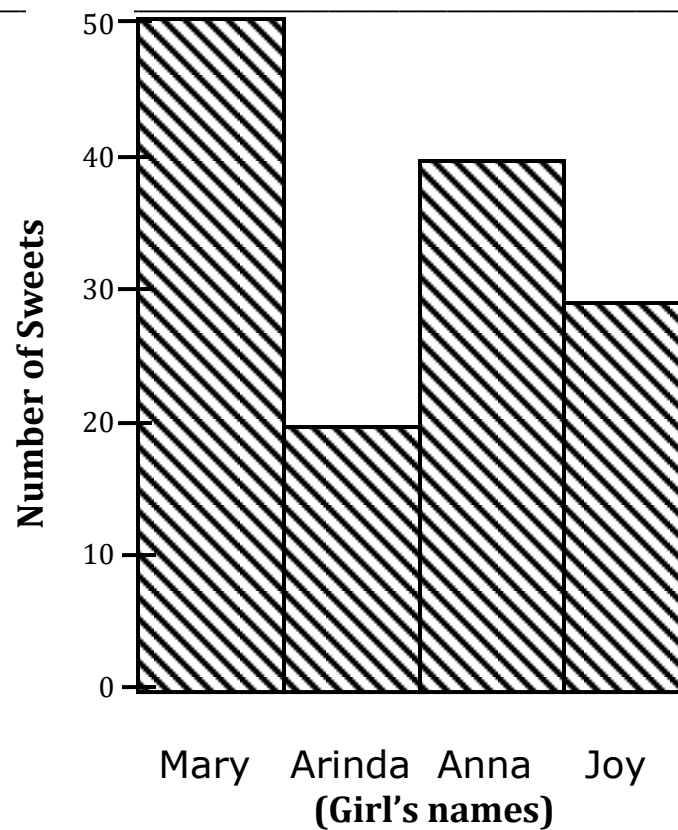
(2marks)

c)

Work out the total cost of a book and a sweet.

(2marks)

32 Four girls were given sweets as shown on the graph below.



a) Who got the highest number of sweets? (1mark)

b) Who received 40 sweets? (1mark)

c) How many sweets did Arinda and Joy receive? (2marks)

*** End ***